

Name _____

Date _____



NUMBER BONDS TO 10 SHEET 6

Fill in the missing numbers to make 10.

- | | | |
|----------------------------------|----------------------------------|----------------------------------|
| 1) $7 + \underline{\quad} = 10$ | 2) $4 + \underline{\quad} = 10$ | 3) $5 + \underline{\quad} = 10$ |
| 4) $2 + \underline{\quad} = 10$ | 5) $9 + \underline{\quad} = 10$ | 6) $3 + \underline{\quad} = 10$ |
| 7) $\underline{\quad} + 5 = 10$ | 8) $\underline{\quad} + 6 = 10$ | 9) $\underline{\quad} + 0 = 10$ |
| 10) $\underline{\quad} + 4 = 10$ | 11) $\underline{\quad} + 1 = 10$ | 12) $\underline{\quad} + 2 = 10$ |

Join the bonds

Join up the number bonds that add up to make 10.

3	5
2	3
7	8
5	7


4	0
1	2
10	9
8	6

Circle the bonds

Put a circle around all the pairs of numbers that total 10.

5	2	3	4	6	1
4	5	7	5	9	2
6	1	9	7	3	4
8	4	5	6	9	1
3	2	5	7	4	8
9	1	3	0	10	2

See if you can
find at least 10
pairs!



Name

Date



NUMBER BONDS TO 10 SHEET 6 ANSWERS

Fill in the missing numbers to make 10.

1) $7 + \underline{3} = 10$

2) $4 + \underline{6} = 10$

3) $5 + \underline{5} = 10$

4) $2 + \underline{8} = 10$

5) $9 + \underline{1} = 10$

6) $3 + \underline{7} = 10$

7) $\underline{5} + 5 = 10$

8) $\underline{4} + 6 = 10$

9) $\underline{10} + 0 = 10$

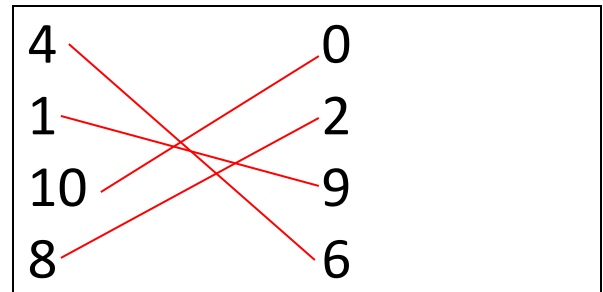
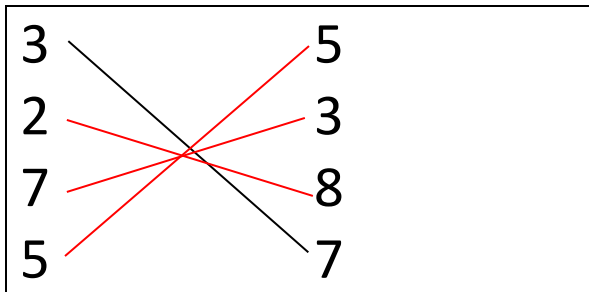
10) $\underline{6} + 4 = 10$

11) $\underline{9} + 1 = 10$

12) $\underline{8} + 2 = 10$

Join the bonds

Join up the number bonds that add up to make 10.




Circle the bonds

Put a circle around all the pairs of numbers that total 10.

5	2	3	4	6	1
4	5	7	5	9	2
6	1	9	7	3	4
8	4	5	6	9	1
3	2	5	7	4	8
9	1	3	0	10	2

Red circles are drawn around the following pairs: (5,5), (2,8), (3,7), (4,6), (6,4), (7,3), (8,2), (9,1), (1,9), (3,7), (4,6), (5,5), (6,4), (7,3), (8,2), (9,1), (1,9), (3,7), (4,6), (5,5), (6,4), (7,3), (8,2), (9,1).

See if you can
find at least 10
pairs!



Free Math Sheets, Math Games and Math Help

MATH-SALAMANDERS.COM